











Name the correct note for each shape.



1. 	2. 	3. 	4. 	5. 
<u> E </u>	<u> </u>	<u> </u>	<u> </u>	<u> </u>
6. 	7. 	8. 	9. 	10. 
<u> </u>	<u> </u>	<u> </u>	<u> </u>	<u> </u>

Play the following combinations on the piano or xylophone.

